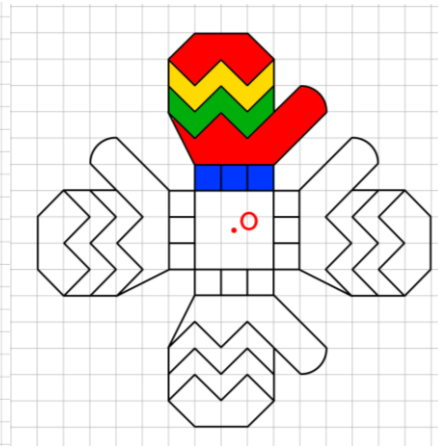
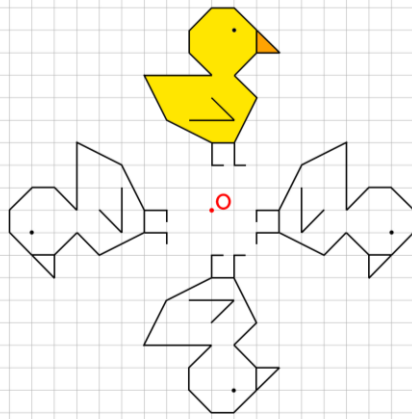
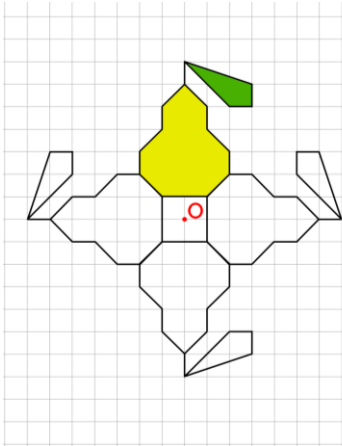


VERIFICA DI GEOMETRIA: TRASLAZIONE, SIMMETRIA, ROTAZIONE

1) Per ogni figura colorata (quella in alto), colora solo quella che si ottiene ruotandola. Poi completa



SENSO

SENSO

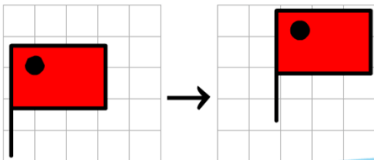
SENSO

AMPIEZZA

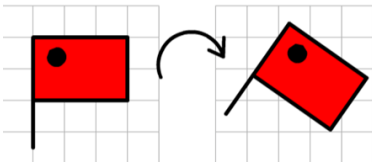
AMPIEZZA.....

AMPIEZZA.....

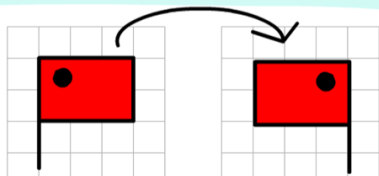
2) Scrivi a fianco se si tratta di una traslazione, di una simmetria o di una rotazione.



.....

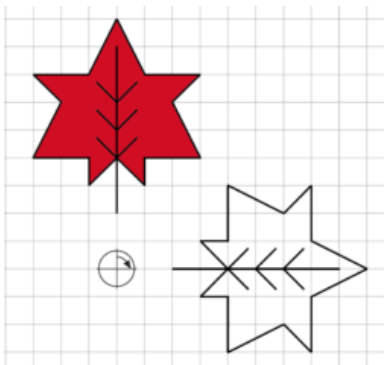


.....



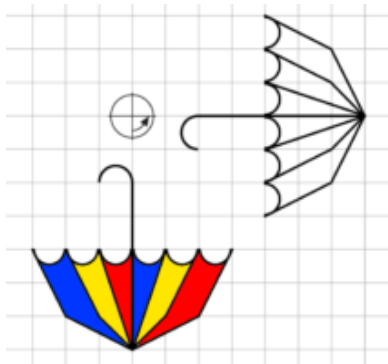
.....

3) Descrivi le seguenti rotazioni



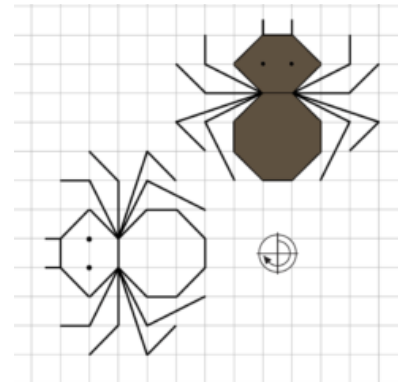
SENSO

AMPIEZZA



SENSO

AMPIEZZA



SENSO

AMPIEZZA