

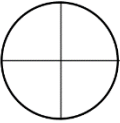
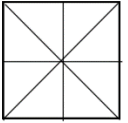

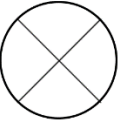
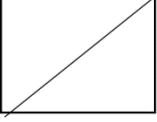


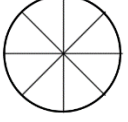
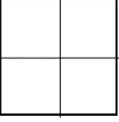
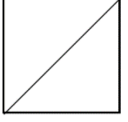
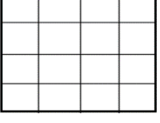
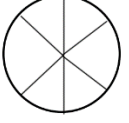
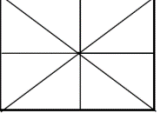
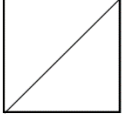

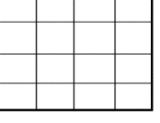
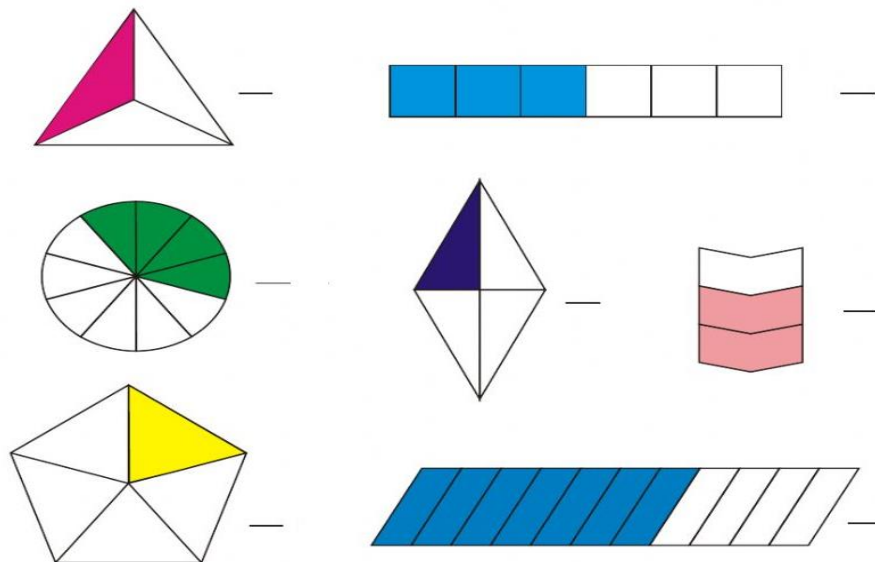


VERIFICA D'INGRESSO: LE FRAZIONI

1. Colora le frazioni secondo le indicazioni (18 punti)

$\frac{1}{4}$ 	$\frac{3}{4}$ 	$\frac{2}{4}$ 	$\frac{1}{8}$ 	$\frac{1}{2}$ 	$\frac{3}{4}$ 
$\frac{1}{2}$ 	$\frac{2}{2}$ 	$\frac{1}{4}$ 	$\frac{3}{8}$ 	$\frac{2}{4}$ 	$\frac{1}{2}$ 
$\frac{11}{16}$ 	$\frac{2}{6}$ 	$\frac{6}{8}$ 	$\frac{1}{2}$ 	$\frac{2}{2}$ 	$\frac{8}{16}$ 

2. Scrivi la frazione rappresentata (7 punti)



3. Colora solo gli interi che sono stati frazionati (8 punti)

